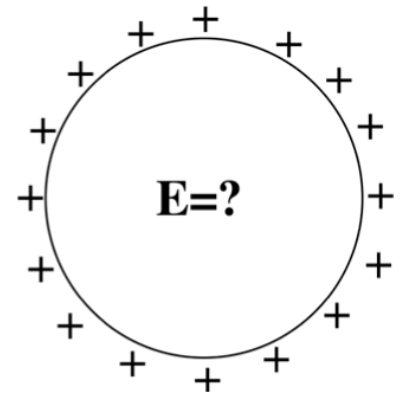


A spherical *shell* has a uniform positive charge density on its surface. (There are no other charges around.)

What is the electric field *inside* the sphere?



- A. $\mathbf{E} = 0$ everywhere inside
- B. \mathbf{E} is non-zero everywhere in the sphere
- C. $\mathbf{E} = 0$ only at the very center, but non-zero elsewhere inside the sphere.
- D. Not enough information given

EXAM 1 INFORMATION

- Exam 1 on Wednesday, October 3rd (BPS 1415)
- 7pm-9pm
 - Arrive on time!
 - Put one seat between you and the next person
- I will provide a formula sheet (posted on Slack already)
- You can bring one-side of a sheet of paper with your own notes.
- 4 questions - Essay, Code, Graphing, Short Calculations

WHAT'S ON EXAM 1?

- Sketch and discuss delta functions in relation to charge density, ρ
- Demonstrate the process for predicting the electric field using a computational algorithm
- Calculate the electric field, \mathbf{E} , inside and outside a continuous distribution of charge and sketch the results
- Calculate the electric potential, V , for a specific charge distribution and discuss what happens in limiting cases

We are trying to compute the the electric potential $V(\mathbf{r})$ for a line of charge at the location $\langle x, 0, z \rangle$. What is $|\mathcal{R}|$ in this case?

A. x

B. z

C. $\sqrt{x^2 + z^2}$

D. Something else

We derived the potential for this short rod to be

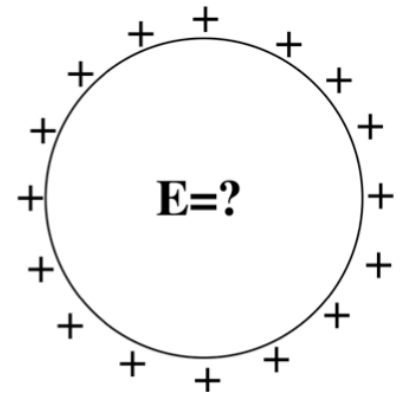
$$V(x, z) = \frac{\lambda}{4\pi\epsilon_0} \log \left[\frac{L + z + \sqrt{x^2 + (L + z)^2}}{L - z + \sqrt{x^2 + (L - z)^2}} \right]$$

The associated electric field at $\langle x, 0, z \rangle$ location can have the following components:

- A. only x
- B. only y
- C. only z
- D. x, y, and z
- E. Something else

A spherical *shell* has a uniform positive charge density on its surface. (There are no other charges around.)

What is the electric field *inside* the sphere?



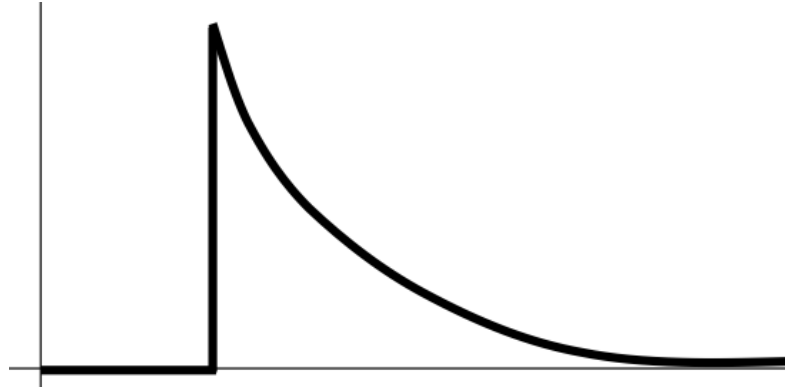
- A. $\mathbf{E} = 0$ everywhere inside
- B. \mathbf{E} is non-zero everywhere in the sphere
- C. $\mathbf{E} = 0$ only at the very center, but non-zero elsewhere inside the sphere.
- D. Not enough information given

We derived the electric potential outside ($r > R$) the charged shell to be

$$V(r) = \frac{1}{4\pi\epsilon_0} \frac{q}{r}$$

What is it for $r < R$?

- A. Zero
- B. Constant
- C. It changes but I don't know how yet
- D. Something else



Could this be a plot of $|\mathbf{E}(r)|$? Or $V(r)$? (for SOME physical situation?)

- A. Could be $E(r)$, or $V(r)$
- B. Could be $E(r)$, but can't be $V(r)$
- C. Can't be $E(r)$, could be $V(r)$
- D. Can't be either
- E. ???